


關卡十一、加 5


試用眼睛辨認下列圖樣(不要數)，然後從附頁選出合適的形狀牌，並完全覆蓋在圖樣上面及填寫答案。

1



$$4 + 5 = \square$$

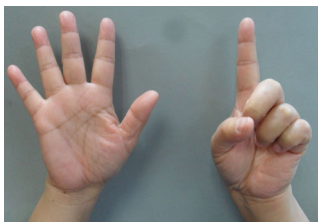
2




$$1 + 5 = \square$$

屯曦的數字手勢也能配合形狀牌，試試完成以下題目。


3



=




=



=




=



請在25/10/2019或之前繳交。

附頁:



附頁:

