


關卡八、減 1

試用眼睛辨認下列圖樣(不要數)，然後從附頁選出合適的形狀牌，並完全覆蓋在圖樣上面及填寫答案。

1




$$4 - 1 = \square$$

2




$$1 - 1 = \square$$

3



$$7 - 1 = \square$$


4



$$9 - 1 = \square$$

請在17/6/2019或之前繳交。

附頁:



附頁:

