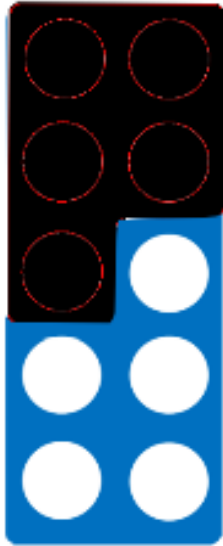


關卡十二、減 5

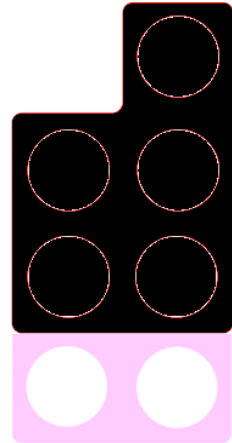
試用眼睛辨認下列圖樣(不要數)，然後從附頁選出合適的形狀牌，並完全覆蓋在圖樣上面及填寫答案。

1



$$10 - 5 = \square$$

2



$$7 - 5 = \square$$

按以下算式，試試推論答案吧!

3

$$1 + 5 = 6$$

$$2 + 5 = 7$$

$$3 + 5 = 8$$

$$4 + 5 = 9$$

$$5 + 5 = 10$$

$$6 - 5 = \square$$

$$7 - 5 = \square$$


$$8 - 5 = \square$$

$$9 - 5 = \square$$


$$10 - 5 = \square$$

請在 或之前繳交。

附頁:



附頁:



附頁:

